

FACULTY OF ELECTRICAL ENGINEERING	
Course: ELECTRICAL ENGINEERING LABORATORY	Review : 7
Course Code: SKEE 2752	Release Date : October 2023
	Last Amendment : September 2023
	Procedure Number : PK-UTM-FKE-(O)-08





UTM

UNIVERSITI TEKNOLOGI MALAYSIA

**FACULTY OF ELECTRICAL ENGINEERING
UNIVERSITI TEKNOLOGI MALAYSIA**

**SKEE 2752
ELECTROTECHNICS LABORATORY
EXPERIMENT 2
AC CIRCUIT**

<p>Prepared by : Name Assoc. Prof. Ir. Ts. Dr. Jasrul Jamani Jamian Assoc. Prof. Ts. Dr. Norzanah Rosmin Dr. Mohd Fadli Rahmat Dr. Rasyidah Mohd Idris Dr. Noor Syazwani Mansor Dr. Norhafezaidi Mat Saman Dr. Zuraimy Adzis Mr. Nik Din Bin Muhammad</p>	<p>Approved by : Department Director Name : Assoc. Prof. Ts. Dr. Shahrin Md Ayob</p>
<p>Signature Stamp Date</p>	<p>Signature Stamp Date</p>
<p style="font-size: 0.8em;">  Assoc. Prof. Eur. Ing. Ir. Ts. Dr. Lau Kwan Yiew Laboratory Academic Coordinator Electrotechnics Laboratory Department of Electrical Power Engineering Faculty of Electrical Engineering Universiti Teknologi Malaysia 81310 Johor Bahru, Johor : 24 September 2024 </p>	<p style="font-size: 0.8em;">  ASSOC. PROF. TS. DR. SHAHRIN BIN MD AYOB Director Division of Electrical Power Engineering Faculty of Electrical Engineering Universiti Teknologi Malaysia 81310 Johor Bahru, Johor : 24 September 2024 </p>

FACULTY OF ELECTRICAL ENGINEERING	
Course: ELECTRICAL ENGINEERING LABORATORY	Review : 7
Course Code: SKEE 2752	Release Date : October 2023
	Last Amendment : September 2023
	Procedure Number : PK-UTM-FKE-(O)-08

I. PRELIMINARY EXERCISE (10 marks)

Important Note: Students are required to do this exercise BEFORE the laboratory session.

For the circuit in **Figure 1**, find: -

- i. The total impedance of the circuit for $R = 2.3 \text{ k}\Omega$, $L = 100 \text{ mH}$.
- ii. The voltage across the resistor, R and inductor, L .
- iii. The current flows in the circuit.
- iv. Obtain the AC waveform of the voltage across the source (V_s), the resistor (V_R) and the inductor (V_L) for one full cycle using any simulation tool (PSpice, MATLAB, Multisim, etc.).
- v. Write the phasor expression and draw phasor diagram of the voltage across the source (V_s), the resistor (V_R) and the inductor (V_L) in a single figure.
- vi. Repeat part (ii)-(v) by using $L = 200 \text{ mH}$
- vii. The inductor of **Figure 1** is then replaced by a capacitor as shown in **Figure 2**.
- viii. Repeat part (ii)-(v) by using $C = 0.1 \mu\text{F}$ and $C = 0.2 \mu\text{F}$.

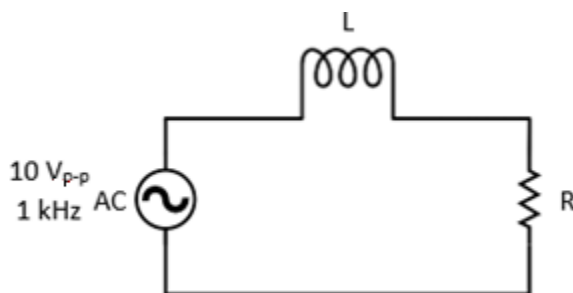


Figure 1

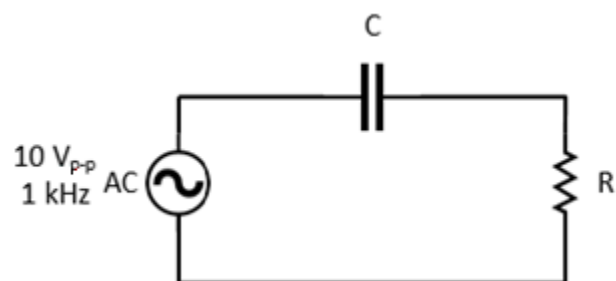


Figure 2

Important Note: Students are required to bring their laptop to VERIFY all simulations results. Students are required to bring a USB drive to capture output from the oscilloscope.

Recommended Reference:

Alexander & Sadiku, 'Fundamental of Electric Circuit 7th edition', McGraw Hill (2020).

FACULTY OF ELECTRICAL ENGINEERING	
Course: ELECTRICAL ENGINEERING LABORATORY	Review 7
Course Code: SKEE 2752	Release Date : October 2023
	Last Amendment : September 2023
	Procedure Number : PK-UTM-FKE-(O)-08

II. EXPERIMENT

‘AC Circuit’

IMPORTANT: Students need to complete the **PRELIMINARY EXERCISE** before the laboratory session.

1. Aims:

To observe and measure the phase difference between voltages in AC circuit.

2. Equipment provided:

Oscilloscope, Function Generator, 2 Probes, Decade Inductor, Decade Capacitor, Decade Resistor

3. Instruction:

Precaution:

- *Ensure that the ground of the oscilloscope probes is connected to the same point and also connected to the negative terminal of the signal generator. Failure to follow this will damage the oscilloscope.*
- *Ask your laboratory instructor to check your circuit connection before you start the experiment.*

i. Series RL Circuit Test

Based on the circuit shown in **Figure 1**, perform an experiment to show the phase difference between the voltage source (V_S), the voltage across the resistor (V_R) and the voltage across the inductor (V_L). Use $R = 2.3 \text{ k}\Omega$ and $L = 100 \text{ mH}$.

Note: You need to use two probes and MATH function of the oscilloscope to get the third waveforms. The phase difference can be measured using the oscilloscope. Save the waveforms into USB drive.

Based on the observed waveform, write the phasor expression and draw the phasor diagram for V_R , V_S , and V_L . Repeat the experiment with $L = 200 \text{ mH}$.

FACULTY OF ELECTRICAL ENGINEERING	
Course: ELECTRICAL ENGINEERING LABORATORY	Review 7
Course Code: SKEE 2752	Release Date : October 2023
	Last Amendment : September 2023
	Procedure Number : PK-UTM-FKE-(O)-08

ii. Series RC Circuit Test

Repeat part 3(i) by replacing the inductor with a capacitor. Use $C = 0.1 \mu\text{F}$ and $C = 0.2 \mu\text{F}$, respectively.

Results must include:

- i. Waveform of V_R , V_S , and V_L (or V_C) recorded from the oscilloscope for all cases.
- ii. Important parameters tabulated in a suitable table(s).
- iii. Voltage phasor diagram of each component in the circuit.

Discussion must include:

- i. Phase shift difference between the voltages for different combination of the elements (different value of L (or C) and differences between L and C). The theoretical explanation of the difference must be explained.
- ii. The relationship between the voltages and the current flows in the circuit.